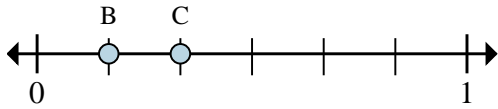




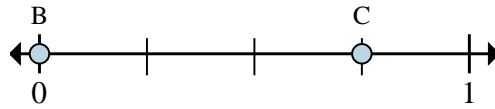
Solve each problem.

Ex)



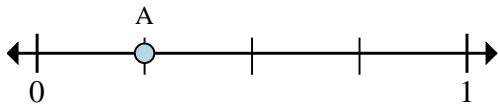
- On this numberline what is the value of 0 written as a fraction?
- On this numberline from B to C is how far (written as a fraction)?

1)



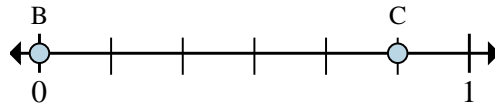
- On this numberline what is the value of 1 written as a fraction?
- On this numberline from B to C is how far (written as a fraction)?

2)



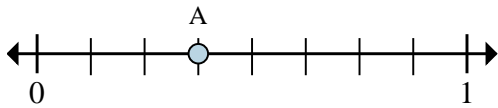
- This numberline is divided into how many pieces?
- What is the location of A (written as a fraction)?

3)



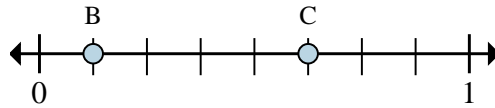
- On this numberline what is the value of 1 written as a fraction?
- On this numberline from B to C is how far (written as a fraction)?

4)



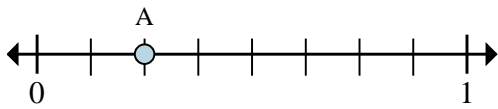
- This numberline is divided into how many pieces?
- What is the location of A (written as a fraction)?

5)



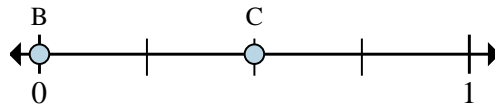
- On this numberline what is the value of 0 written as a fraction?
- On this numberline from B to C is how far (written as a fraction)?

6)



- This numberline is divided into how many pieces?
- What is the location of A (written as a fraction)?

7)



- On this numberline what is the value of 1 written as a fraction?
- On this numberline from B to C is how far (written as a fraction)?

Answers

Exa. $\frac{0}{6}$

Exb. $\frac{1}{6}$

1a. _____

1b. _____

2a. _____

2b. _____

3a. _____

3b. _____

4a. _____

4b. _____

5a. _____

5b. _____

6a. _____

6b. _____

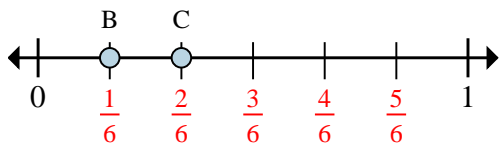
7a. _____

7b. _____



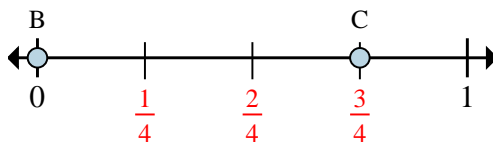
Solve each problem.

Ex)



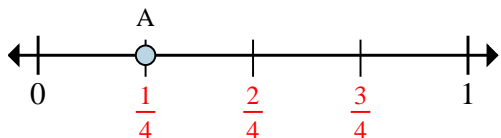
- On this numberline what is the value of 1 written as a fraction?
- On this numberline from B to C is how far (written as a fraction)?

1)



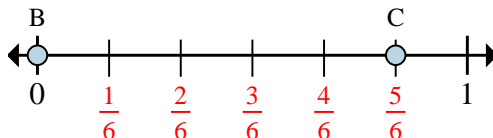
- On this numberline what is the value of 1 written as a fraction?
- On this numberline from B to C is how far (written as a fraction)?

2)



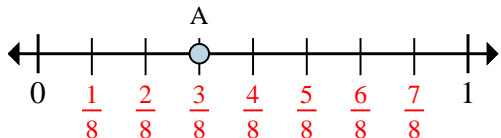
- This numberline is divided into how many pieces?
- What is the location of A (written as a fraction)?

3)



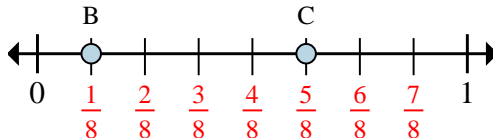
- On this numberline what is the value of 1 written as a fraction?
- On this numberline from B to C is how far (written as a fraction)?

4)



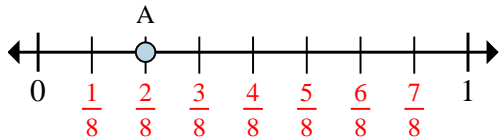
- This numberline is divided into how many pieces?
- What is the location of A (written as a fraction)?

5)



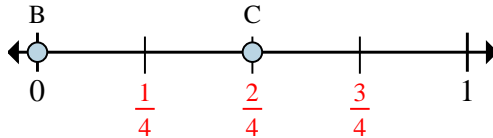
- On this numberline what is the value of 0 written as a fraction?
- On this numberline from B to C is how far (written as a fraction)?

6)



- This numberline is divided into how many pieces?
- What is the location of A (written as a fraction)?

7)



- On this numberline what is the value of 1 written as a fraction?
- On this numberline from B to C is how far (written as a fraction)?

Answers

Exa. $\frac{0}{6}$

Exb. $\frac{1}{6}$

1a. $\frac{4}{4}$

1b. $\frac{3}{4}$

2a. **4**

2b. $\frac{1}{4}$

3a. $\frac{6}{6}$

3b. $\frac{5}{6}$

4a. **8**

4b. $\frac{3}{8}$

5a. $\frac{0}{8}$

5b. $\frac{4}{8}$

6a. **8**

6b. $\frac{2}{8}$

7a. $\frac{4}{4}$

7b. $\frac{2}{4}$